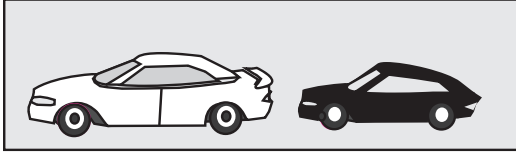


Unit 8 Homework 3


Student Name: _____

Compare the following graphics.



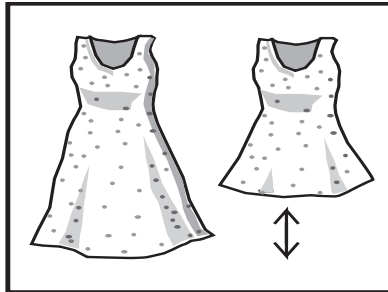
Example: The white car is bigger than the black car.

Unit 8



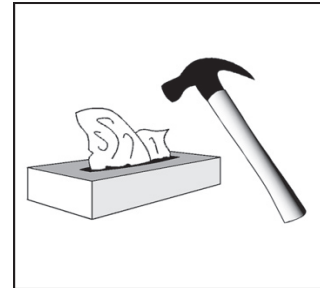
1.

1. _____



2.

2. _____



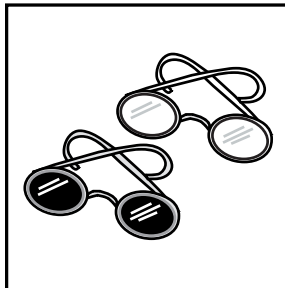
3.

3. _____



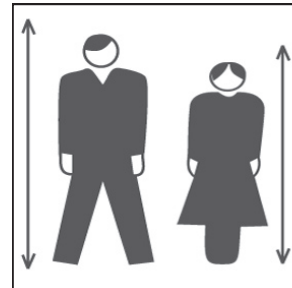
4.

4. _____



5.


5. _____




6.

6. _____

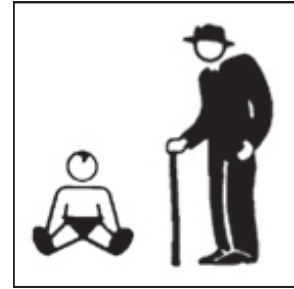
Unit 8 Homework 3 (continued)



7.



8.



9.

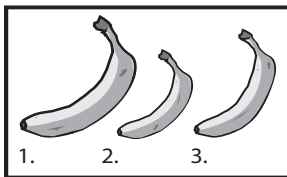
7. _____

8. _____

9. _____

Unit 8

Answer the following questions with complete sentences.



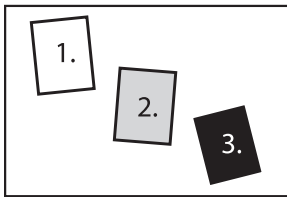
Example:

Which banana is the biggest?


Banana number 1 is the biggest.

Which banana is the smallest?

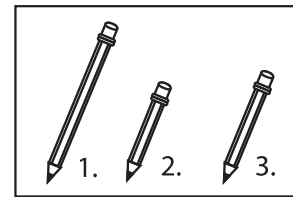
Banana number 2 is the smallest.



10 & 11



12 & 13



14 & 15

10. Which piece of paper is the darkest? _____

11. Which piece of paper is the lightest? _____


12. Which is the heaviest thing? _____

13. Which is the lightest thing? _____


14. Compare pencil number 1 to pencils 2 and 3. _____

15. Compare pencil number 2 to pencils 1 and 3. _____


Unit 8 Homework 3 (continued)



Billy



Koah




Gloria

Unit 8

16. Who is the oldest? _____

17. Who is the youngest? _____



Derek



Lee



Benjamin

18. Does Lee have more hair than Benjamin? _____

19. Does Benjamin have more hair than Derek? _____

20. Who has the most hair? _____

21. Who has the least hair? _____

22. Does Derek have a lot of hair? _____

23. Does Benjamin have a lot of hair? _____